

## Undefended Pieces, Homework #6

Name: \_\_\_\_\_ Bring the completed sheet to the next chess club meeting. Use pencil. Don't use red.

*In each of the diagrams, circle the undefended pieces.* Two are done for you. The king is never considered undefended since he can never be captured, only put in checkmate. The king can be a defender. A piece does not need to be actually under attack to be considered undefended.

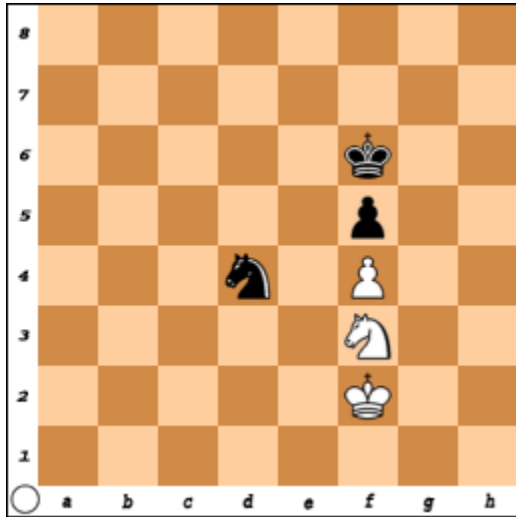


Figure 1. Find two undefended pieces.

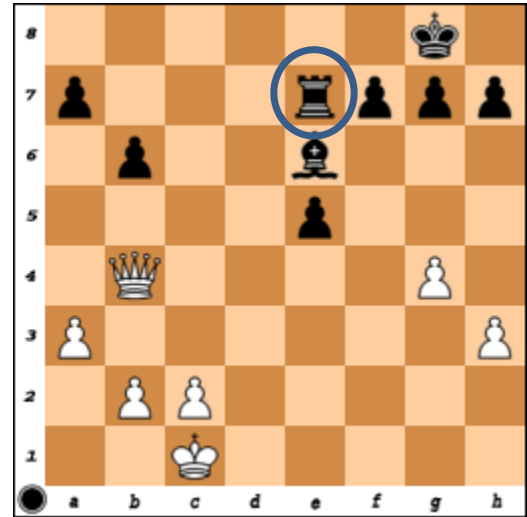


Figure 2. Find two more undefended pieces.




Figure 3. Find six undefended pieces.






Figure 4. Find five more undefended pieces.

(This  is the queen. And this  is the king.)

**When you play: Don't move a piece to an undefended square without a good reason!**